


Can you add  
these numbers  
together?

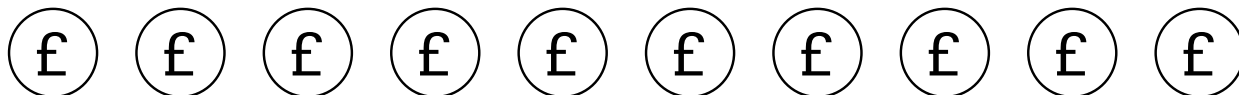


# Money Maths: Addition

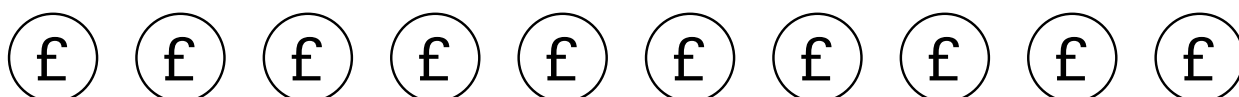
Colour the coins to help you add the numbers together.

Write your answer in the box.

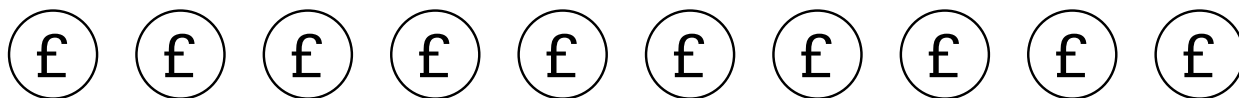
$$4 + 3 = \boxed{\phantom{00}}$$



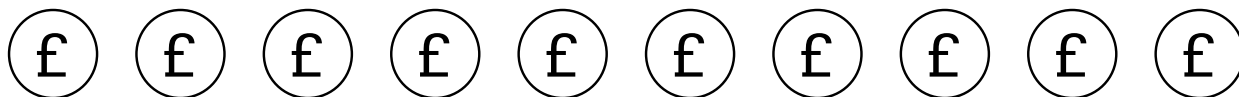
$$8 + 1 = \boxed{\phantom{00}}$$



$$2 + 3 = \boxed{\phantom{00}}$$



$$6 + 2 = \boxed{\phantom{00}}$$



$$5 + 5 = \boxed{\phantom{00}}$$

